

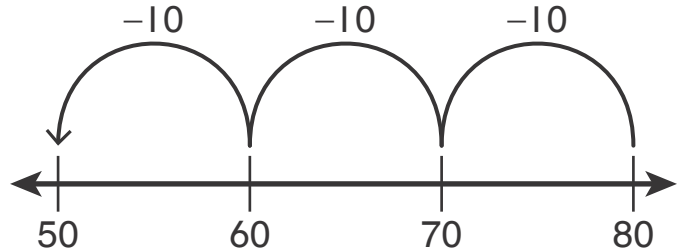
Name _____

Know Your Number Lines

Match each problem with the number line that could be used to solve it. Then write the answer to each problem.

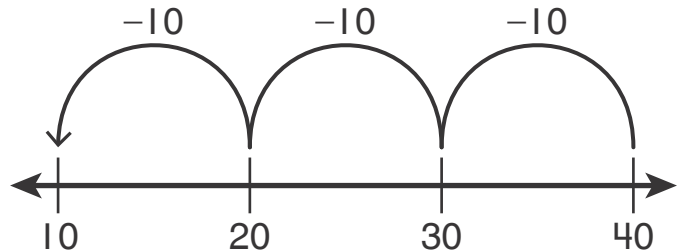
1. $70 - 50 = ?$

$70 - 50 = \underline{\hspace{2cm}}$



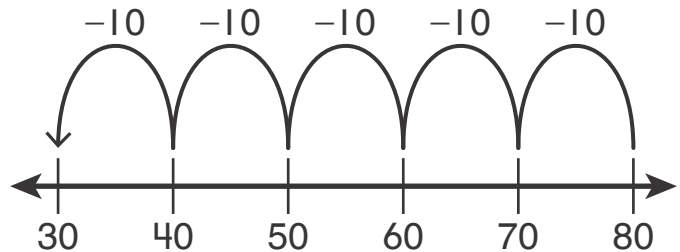
2. $80 - 30 = ?$

$80 - 30 = \underline{\hspace{2cm}}$



3. $80 - ? = 30$

$80 - \underline{\hspace{2cm}} = 30$



4. $40 - ? = 10$

$40 - \underline{\hspace{2cm}} = 10$

