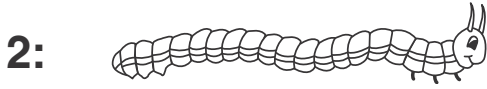
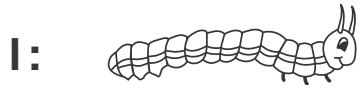


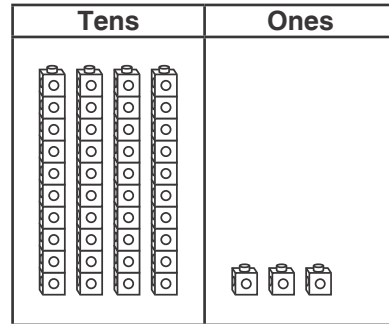
1. Compare the caterpillars.



Which statement is true?

- (A) 1 is the longest.
- (B) 2 is the longest.
- (C) 3 is the longest.
- (D) 1 is the shortest.

2. Count the tens and ones.  
Which number is shown?



- (A) 70
- (B) 43
- (C) 34
- (D) 7

3. Use addition to solve the subtraction problem.  
Draw a picture to show your thinking.

$20 + \underline{\quad} = 60$ , so  $60 - 20 = \underline{\quad}$ .