


Name _____

Solid Match

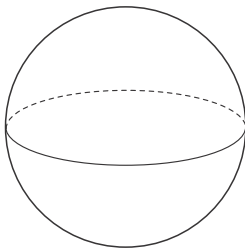
Draw a line to match the shape to its description.

1.



1 flat surface
1 vertex

2.



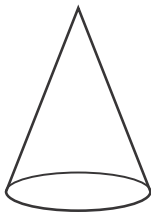
0 flat surfaces
0 vertices

3.



6 flat surfaces
8 vertices

4.



2 flat surfaces
0 vertices

5. Draw the solid figure that has 2 flat surfaces and 0 vertices.

