

AZ Vocabulary

1. These **3-D shapes** have **flat surfaces**.

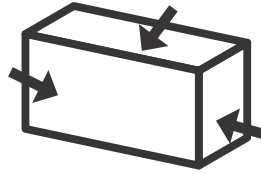


cone

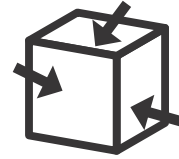


cylinder

These 3-D shapes have **faces**.



rectangular prism



cube

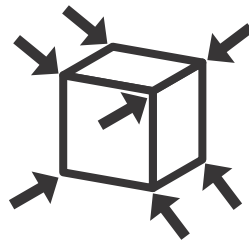
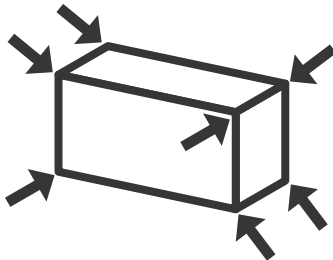
How many flat surfaces does each shape have?

cone: _____ cylinder: _____

How many faces does each shape have?

rectangular prism: _____ cube: _____

2. How many vertices does each 3-D shape have?



rectangular prism: 8 cube: _____ cone: _____

On the Back!

3. Find an object shaped like a rectangular prism. Count how many faces and vertices it has. Record them on the back of this sheet.